

© International Baccalaureate Organization 2023

All rights reserved. No part of this product may be reproduced in any form or by any electronic or mechanical means, including information storage and retrieval systems, without the prior written permission from the IB. Additionally, the license tied with this product prohibits use of any selected files or extracts from this product. Use by third parties, including but not limited to publishers, private teachers, tutoring or study services, preparatory schools, vendors operating curriculum mapping services or teacher resource digital platforms and app developers, whether fee-covered or not, is prohibited and is a criminal offense.

More information on how to request written permission in the form of a license can be obtained from <https://ibo.org/become-an-ib-school/ib-publishing/licensing/applying-for-a-license/>.

© Organisation du Baccalauréat International 2023

Tous droits réservés. Aucune partie de ce produit ne peut être reproduite sous quelque forme ni par quelque moyen que ce soit, électronique ou mécanique, y compris des systèmes de stockage et de récupération d'informations, sans l'autorisation écrite préalable de l'IB. De plus, la licence associée à ce produit interdit toute utilisation de tout fichier ou extrait sélectionné dans ce produit. L'utilisation par des tiers, y compris, sans toutefois s'y limiter, des éditeurs, des professeurs particuliers, des services de tutorat ou d'aide aux études, des établissements de préparation à l'enseignement supérieur, des fournisseurs de services de planification des programmes d'études, des gestionnaires de plateformes pédagogiques en ligne, et des développeurs d'applications, moyennant paiement ou non, est interdite et constitue une infraction pénale.

Pour plus d'informations sur la procédure à suivre pour obtenir une autorisation écrite sous la forme d'une licence, rendez-vous à l'adresse <https://ibo.org/become-an-ib-school/ib-publishing/licensing/applying-for-a-license/>.

© Organización del Bachillerato Internacional, 2023

Todos los derechos reservados. No se podrá reproducir ninguna parte de este producto de ninguna forma ni por ningún medio electrónico o mecánico, incluidos los sistemas de almacenamiento y recuperación de información, sin la previa autorización por escrito del IB. Además, la licencia vinculada a este producto prohíbe el uso de todo archivo o fragmento seleccionado de este producto. El uso por parte de terceros —lo que incluye, a título enunciativo, editoriales, profesores particulares, servicios de apoyo académico o ayuda para el estudio, colegios preparatorios, desarrolladores de aplicaciones y entidades que presten servicios de planificación curricular u ofrezcan recursos para docentes mediante plataformas digitales—, ya sea incluido en tasas o no, está prohibido y constituye un delito.

En este enlace encontrará más información sobre cómo solicitar una autorización por escrito en forma de licencia: <https://ibo.org/become-an-ib-school/ib-publishing/licensing/applying-for-a-license/>.

Chemistry

Standard level

Paper 1

11 May 2023

Zone A afternoon | Zone B morning | Zone C afternoon

45 minutes

Instructions to candidates

- Do not open this examination paper until instructed to do so.
- Answer all the questions.
- For each question, choose the answer you consider to be the best and indicate your choice on the answer sheet provided.
- The periodic table is provided for reference on page 2 of this examination paper.
- The maximum mark for this examination paper is **[30 marks]**.

1. Which is the correct equation for the electrolysis of molten sodium chloride?

- A. $2\text{NaCl}(\text{l}) \rightarrow 2\text{Na}(\text{l}) + \text{Cl}_2(\text{g})$
- B. $2\text{NaCl}(\text{s}) \rightarrow 2\text{Na}(\text{s}) + \text{Cl}_2(\text{g})$
- C. $2\text{NaCl}(\text{l}) \rightarrow 2\text{Na}(\text{s}) + \text{Cl}_2(\text{g})$
- D. $2\text{NaCl}(\text{aq}) \rightarrow 2\text{Na}(\text{s}) + \text{Cl}_2(\text{g})$

2. What is the mass of one molecule of C_{60} ?

$$N_{\text{A}} = 6.0 \times 10^{23}$$

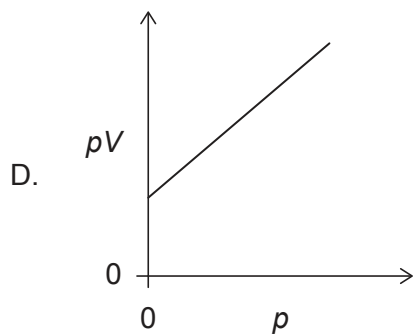
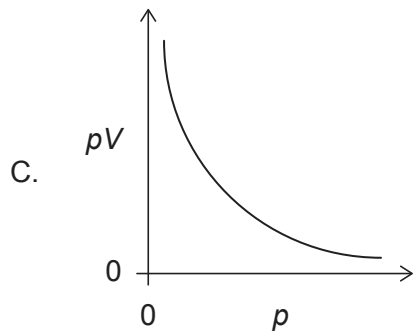
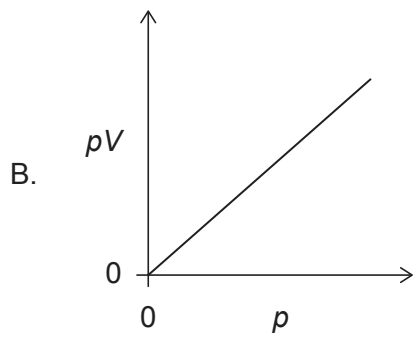
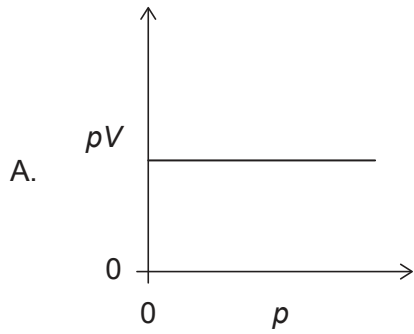
- A. $1.0 \times 10^{-22} \text{g}$
- B. $2.0 \times 10^{-23} \text{g}$
- C. $8.3 \times 10^{-24} \text{g}$
- D. $1.2 \times 10^{-21} \text{g}$

3. 20cm^3 of gas A reacts with 20cm^3 of gas B to produce 10cm^3 of gas A_xB_y and 10cm^3 of excess gas A. What are the correct values for subscripts **x** and **y** in the empirical formula of the product $\text{A}_x\text{B}_y(\text{g})$?

	x	y
A.	2	1
B.	2	2
C.	1	1
D.	1	2

Turn over

4. The volume V for a fixed mass of an ideal gas was measured at constant temperature at different pressures p . Which graph shows the correct relationship between pV against p ?



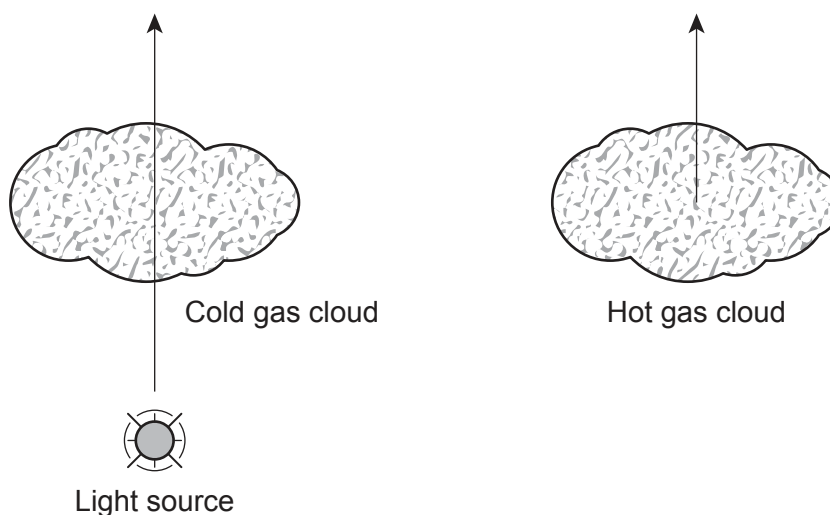
5. What is the correct ground state electron orbital configuration for $2s^2 2p^2$?

	2s	2p		
A.	↑↓	↑	↑	
B.	↑↓	↑	↓	
C.	↑↑	↑	↑	
D.	↑↑	↑	↓	

6. The following diagram shows a light passing through a cold gas cloud, and light from a hot gas cloud.

A light source through a cold gas cloud

Light from a hot gas cloud



Which types of spectra are associated with light passing through a cold gas cloud, **Spectrum A**, and light from a hot gas cloud, **Spectrum B**?

	Spectrum A	Spectrum B
A.	Absorption	Emission
B.	Emission	Absorption
C.	Absorption	Absorption
D.	Emission	Emission

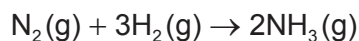
Turn over

7. What is the electron configuration for an element in group 4 period 5?
- A. $[\text{Kr}] 5s^2 4d^2$
 B. $[\text{Ar}] 4s^2 3d^3$
 C. $[\text{Ar}] 4s^2 3d^{10} 4p^3$
 D. $[\text{Kr}] 5s^2 4d^{10} 5p^2$
8. Which properties increase down the group 1 alkali metals?
- I. atomic radii
 II. melting point
 III. reactivity with water
- A. I and II only
 B. I and III only
 C. II and III only
 D. I, II and III
9. Which compound is both volatile and soluble in water?
- A. NaCl
 B. $\text{CH}_3\text{CH}_2\text{CH}_3$
 C. CH_3OH
 D. $\text{C}_{12}\text{H}_{22}\text{O}_{11}$
10. Which are the correct sequences of **increasing** bond strengths and bond lengths between two carbon atoms?

	Bond strength	Bond length
A.	$\text{C}\equiv\text{C} < \text{C}=\text{C} < \text{C}-\text{C}$	$\text{C}\equiv\text{C} < \text{C}=\text{C} < \text{C}-\text{C}$
B.	$\text{C}\equiv\text{C} < \text{C}=\text{C} < \text{C}-\text{C}$	$\text{C}-\text{C} < \text{C}=\text{C} < \text{C}\equiv\text{C}$
C.	$\text{C}-\text{C} < \text{C}=\text{C} < \text{C}\equiv\text{C}$	$\text{C}\equiv\text{C} < \text{C}=\text{C} < \text{C}-\text{C}$
D.	$\text{C}-\text{C} < \text{C}=\text{C} < \text{C}\equiv\text{C}$	$\text{C}-\text{C} < \text{C}=\text{C} < \text{C}\equiv\text{C}$

11. What is the electron domain geometry of sulfur dioxide, SO_2 ?
- A. bent
 B. linear
 C. tetrahedral
 D. trigonal planar
12. What is the correct comparison of H–N–H bond angles in NH_2^- , NH_3 , and NH_4^+ ?
- A. $\text{NH}_2^- < \text{NH}_3 < \text{NH}_4^+$
 B. $\text{NH}_4^+ < \text{NH}_3 < \text{NH}_2^-$
 C. $\text{NH}_3 < \text{NH}_2^- < \text{NH}_4^+$
 D. $\text{NH}_3 < \text{NH}_4^+ < \text{NH}_2^-$

13. The enthalpy of formation of ammonia gas is -46 kJ mol^{-1} .



What is the energy released, in kJ, in the reaction?

- A. 23
 B. 46
 C. 69
 D. 92
14. What is ΔH , in kJ, for the reaction $\text{N}_2\text{H}_4(\text{l}) + \text{H}_2(\text{g}) \rightarrow 2\text{NH}_3(\text{g})$?

Reaction	ΔH
$\text{N}_2\text{H}_4(\text{l}) + \text{CH}_3\text{OH}(\text{l}) \rightarrow \text{CH}_2\text{O}(\text{g}) + \text{N}_2(\text{g}) + 3\text{H}_2(\text{g})$	-37 kJ
$\text{N}_2(\text{g}) + 3\text{H}_2(\text{g}) \rightarrow 2\text{NH}_3(\text{g})$	-46 kJ
$\text{CH}_3\text{OH}(\text{l}) \rightarrow \text{CH}_2\text{O}(\text{g}) + \text{H}_2(\text{g})$	-65 kJ

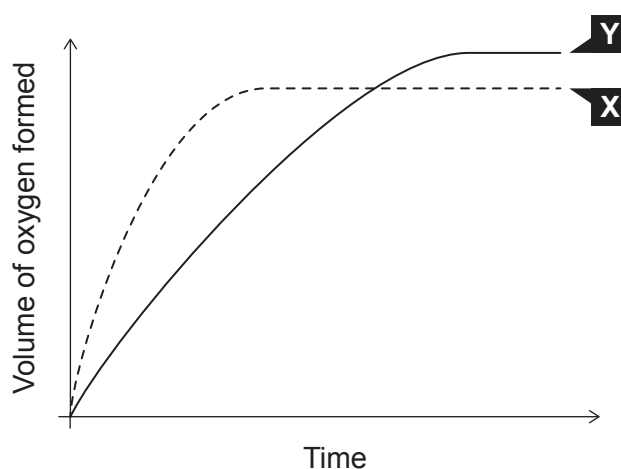
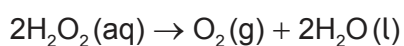
- A. -18
 B. 18
 C. -83
 D. -148

Turn over

15. Which statement concerning bond breaking is correct?

- A. Requires energy and is endothermic.
- B. Requires energy and is exothermic.
- C. Releases energy and is endothermic.
- D. Releases energy and is exothermic.

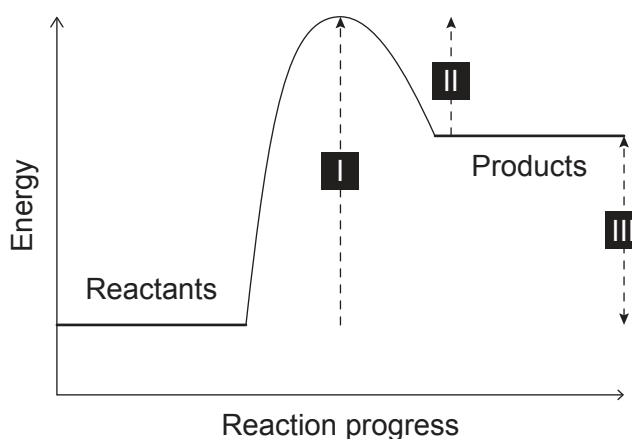
16. Curve **X** on the following graph shows the volume of oxygen formed during the catalytic decomposition of a 1.0 mol dm^{-3} solution of hydrogen peroxide.



Which change would produce the curve **Y**?

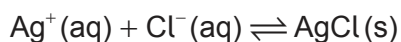
- A. Adding water.
- B. Adding some 0.1 mol dm^{-3} hydrogen peroxide solution.
- C. Adding some 2.0 mol dm^{-3} hydrogen peroxide solution.
- D. Repeating the experiment without a catalyst.

17. A potential energy profile is shown for a reaction.



Which energy changes would a catalyst affect?

- A. I and II only
 - B. I and III only
 - C. II and III only
 - D. I, II and III
18. Which condition will cause the given equilibrium to shift to the right?

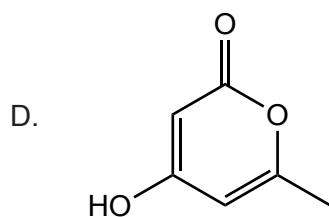
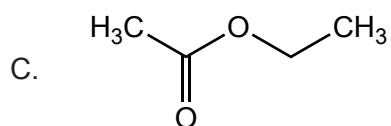
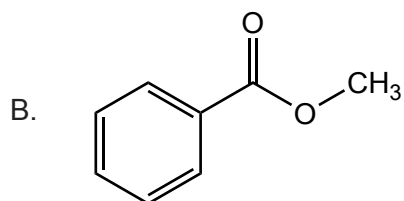
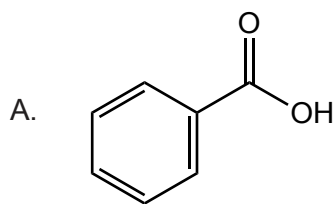


- A. One half of solid AgCl is removed.
 - B. Water is added.
 - C. Solid NaCl is added.
 - D. The system is subjected to increased pressure.
19. Which reaction represents the neutralization of a Brønsted–Lowry acid and base?
- A. $2\text{HCl}(\text{aq}) + \text{Zn}(\text{s}) \rightarrow \text{ZnCl}_2(\text{aq}) + \text{H}_2(\text{g})$
 - B. $2\text{HCl}(\text{aq}) + \text{ZnO}(\text{s}) \rightarrow \text{ZnCl}_2(\text{aq}) + \text{H}_2\text{O}(\text{l})$
 - C. $4\text{NH}_3(\text{g}) + 5\text{O}_2(\text{g}) \rightarrow 4\text{NO}(\text{g}) + 6\text{H}_2\text{O}(\text{l})$
 - D. $\text{C}_2\text{H}_4(\text{g}) + \text{H}_2(\text{g}) \rightarrow \text{C}_2\text{H}_6(\text{g})$

Turn over

20. What is the hydroxide ion concentration in a solution of pH = 4 at 298 K?
- A. 4
 - B. 10
 - C. 10^{-4}
 - D. 10^{-10}
21. Which element has variable oxidation states in its compounds?
- A. Potassium
 - B. Calcium
 - C. Fluorine
 - D. Bromine
22. Which chemical process would produce a voltaic cell?
- A. spontaneous redox reaction
 - B. spontaneous non-redox reaction
 - C. non-spontaneous redox reaction
 - D. non-spontaneous non-redox reaction
23. Which species could be reduced to form SO_2 ?
- A. S
 - B. H_2SO_3
 - C. H_2SO_4
 - D. $(\text{CH}_3)_2\text{S}$

24. Which compound is an aromatic ester?

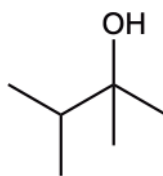


25. Which products could be obtained by heating isomers of C_3H_8O under reflux with acidified potassium dichromate (VI)?

- I. propanal
 - II. propanone
 - III. propanoic acid
- A. I and II only
- B. I and III only
- C. II and III only
- D. I, II and III

Turn over

26. What is the preferred IUPAC name of the structure shown?



- A. 2-ethyl-3-methylbutan-1-ol
- B. 2,3-dimethylbutan-2-ol
- C. 1-ethyl-2-methylpropan-1-ol
- D. 1,1,2-trimethylpropan-1-ol

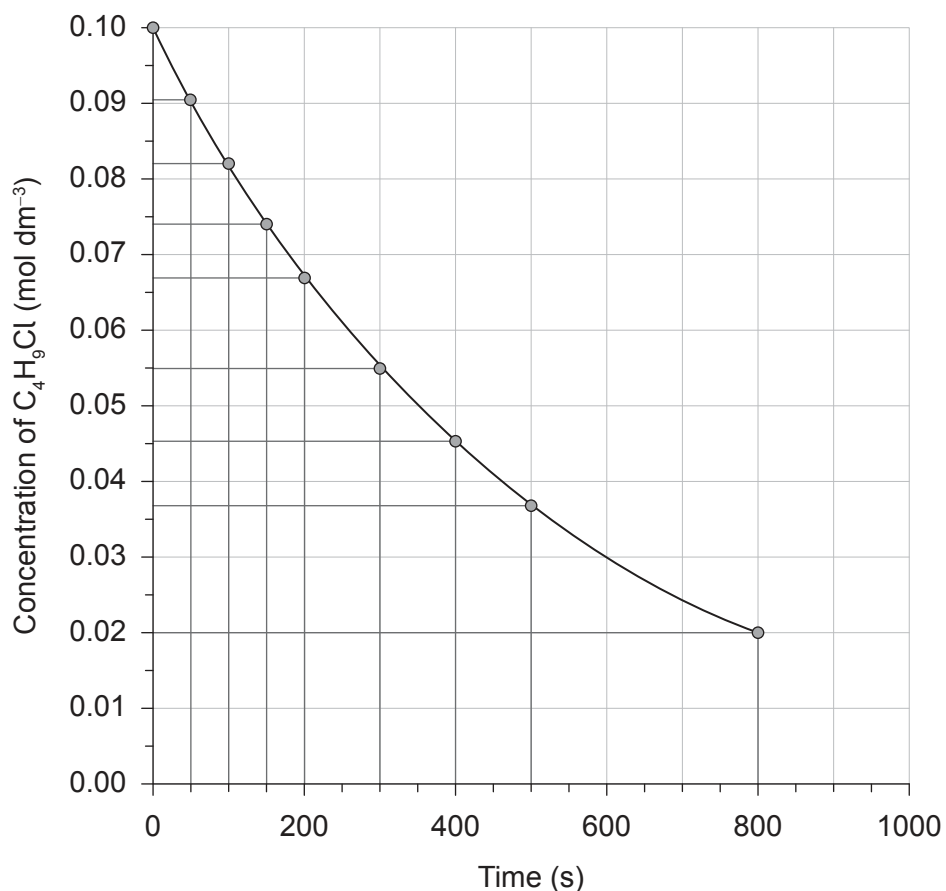
27. What are the most likely reactions ethene and benzene will undergo?

	Ethene	Benzene
A.	Addition	Substitution
B.	Addition	Addition
C.	Substitution	Addition
D.	Substitution	Substitution

28. Which observation would explain a systematic error for an experiment involving the combustion of magnesium to find the empirical formula of its oxide?

- A. The crucible lid was slightly ajar during heating.
- B. The product was a white powdery substance.
- C. The crucible had black soot on the bottom after heating.
- D. The flame colour during heating was yellow.

29. The following graph shows the concentration of C_4H_9Cl versus time.



What is the average rate of reaction over the first 800 seconds?

- A. $1 \times 10^{-3} \text{ mol dm}^{-3} \text{ s}^{-1}$
 - B. $1 \times 10^{-4} \text{ mol dm}^{-3} \text{ s}^{-1}$
 - C. $2 \times 10^{-3} \text{ mol dm}^{-3} \text{ s}^{-1}$
 - D. $2 \times 10^{-4} \text{ mol dm}^{-3} \text{ s}^{-1}$
30. Which compound will have only one 1H NMR signal and show a carbonyl group in the IR spectrum?
- A. CH_3CHO
 - B. CH_3COOH
 - C. CH_3OCH_3
 - D. CH_3COCH_3

Disclaimer:

Content used in IB assessments is taken from authentic, third-party sources. The views expressed within them belong to their individual authors and/or publishers and do not necessarily reflect the views of the IB.

References:

6. Image with permission from The Pennsylvania State University.

All other texts, graphics and illustrations © International Baccalaureate Organization 2023